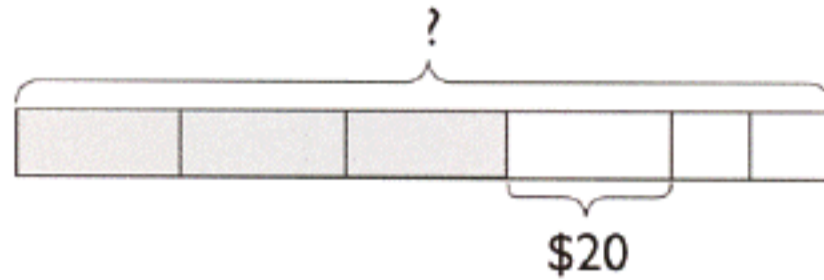


EXERCISE 8

1. Lucy spent $\frac{3}{5}$ of her money on a handbag. She spent the rest of the money on a dress and a belt. The handbag cost twice as much as the dress. The dress cost \$20 more than the belt. How much money did she have at first?

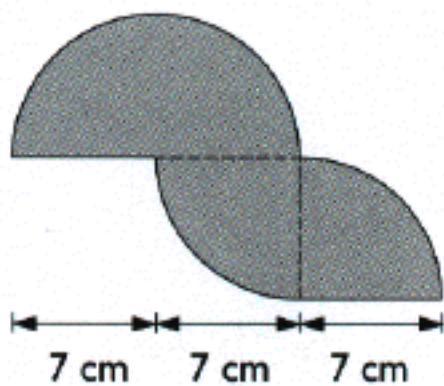


EXERCISE 14

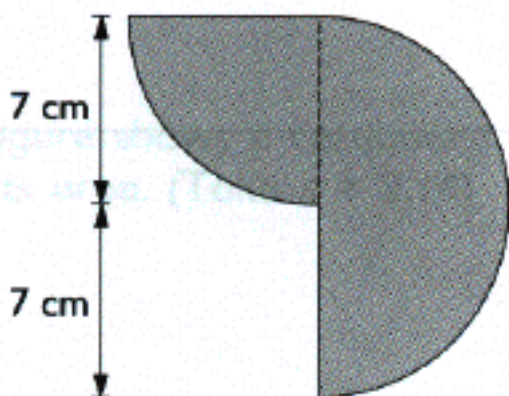
1. The following figures are made up of semicircles and quarter circles.

Find the area of each figure. (Take $\pi = \frac{22}{7}$)

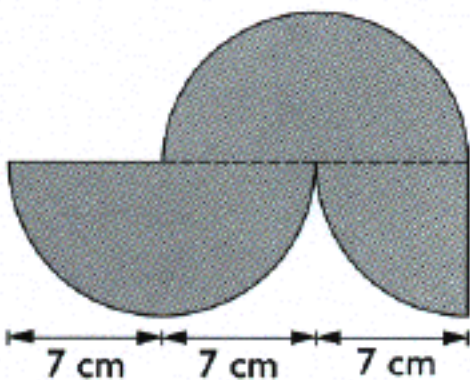
(a)



(b)



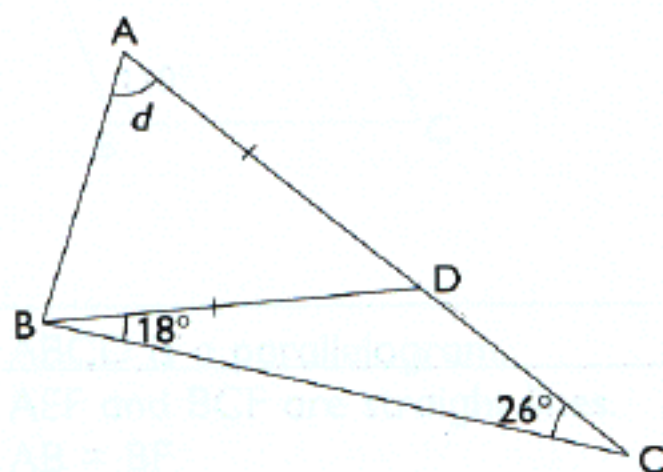
(c)



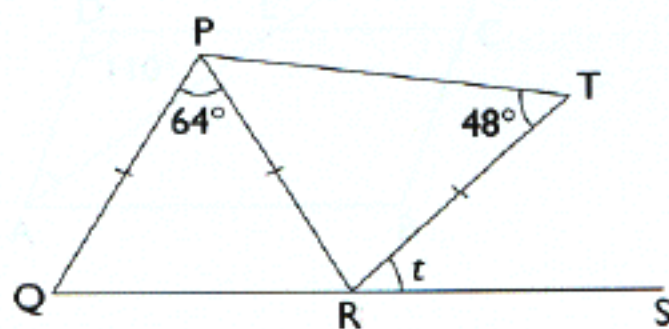
EXERCISE 25

The following figures are not drawn to scale.

1. ADC is a straight line.
 $BD = AD$
 Find $\angle d$.



2. QRS is a straight line.
 $PQ = PR = TR$
 Find $\angle t$.



3. $ABDE$ is a trapezoid.
 ABC is an equilateral triangle.
 Find $\angle r$.

